

Year 2: Sweet Shop Challenge

Item	Price
	15p
	20p
	32p
	50p
	30p
	41p
	35p
	10p
	40p
	2p

If you bought the 2 most expensive things in the shop, how much would it cost you?

How **much more** is the Twix than the Mars?


How **much more** is the Toblerone than the Smarties?

How much would it cost to buy your 2 favourite sweets?

You have 30p to spend at the sweet shop. Find 5 ways to spend 30p. Show how you worked it out.


Finding Change from 50p:


Draw a bar model to show the change like this:


50p	
 30p	20p


Write some sentences about what you did like this:

$50p - 30p = 20p$ I had 50p, I spent 30p on a Twix . I had 20p change.

50p	
32p 	?

50p	
40p 	?

50p	
35p 	?

50p	
41p 	?

Challenge: If you bought one of each sweet, how much change would you have from £3?